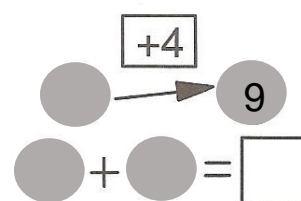
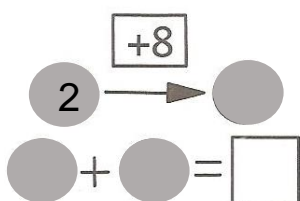
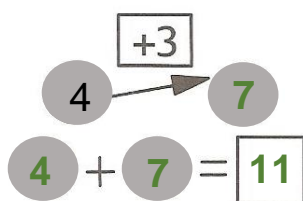
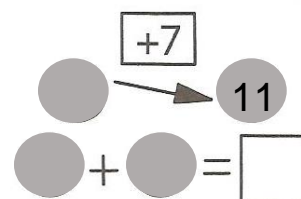
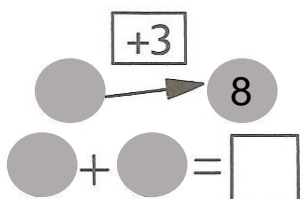
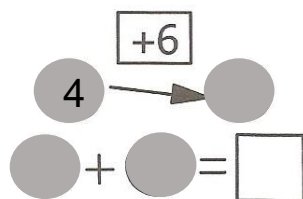


A VYŘEŠ HADA. NAJDI SOUČET ŠEDÝCH POLÍ.



B VYŘEŠ HADA. NAJDI SOUČET ŠEDÝCH POLÍ.



C VYŘEŠ HADA. NAJDI SOUČET ŠEDÝCH POLÍ.

