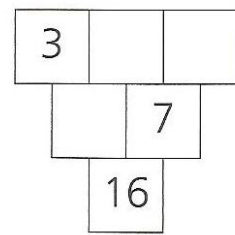
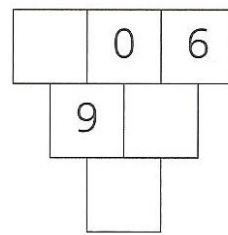
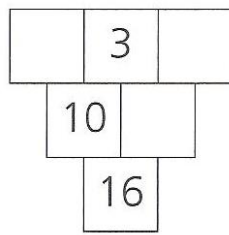
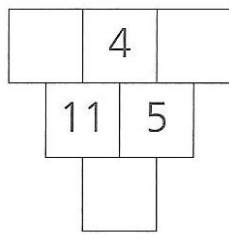
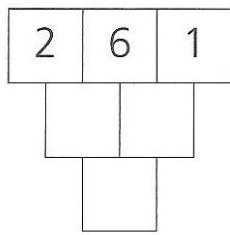
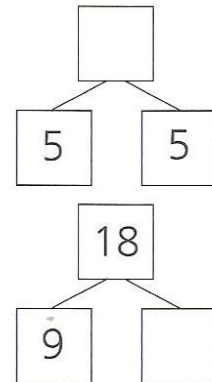
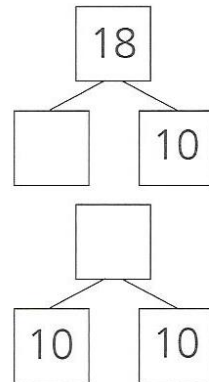
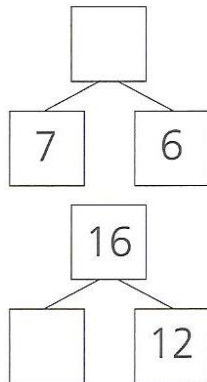
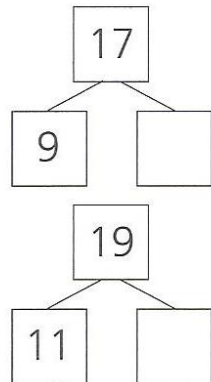
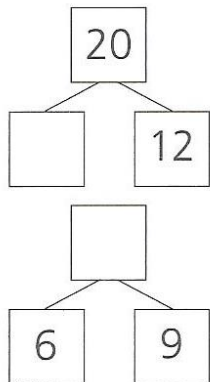


## DOPLŇ ČÍSLA



## DOPLŇ ČÍSLA



## DOPLŇ

$$18 - 8 = \square$$

$$15 + 4 = \square$$

$$0 + \square = 19$$

$$18 - \square = 16$$

$$\square - 2 = 18$$

$$\square - 14 = 6$$

$$18 - 9 = \square$$

$$9 + 10 = \square$$

$$12 + \square = 19$$

$$18 - \square = 15$$

$$\square - 6 = 14$$

$$\square - 2 = 17$$

$$18 - 14 = \square$$


$$14 + 5 = \square$$

$$13 + \square = 19$$


$$18 - \square = 18$$

$$\square - 1 = 19$$

$$\square - 13 = 7$$

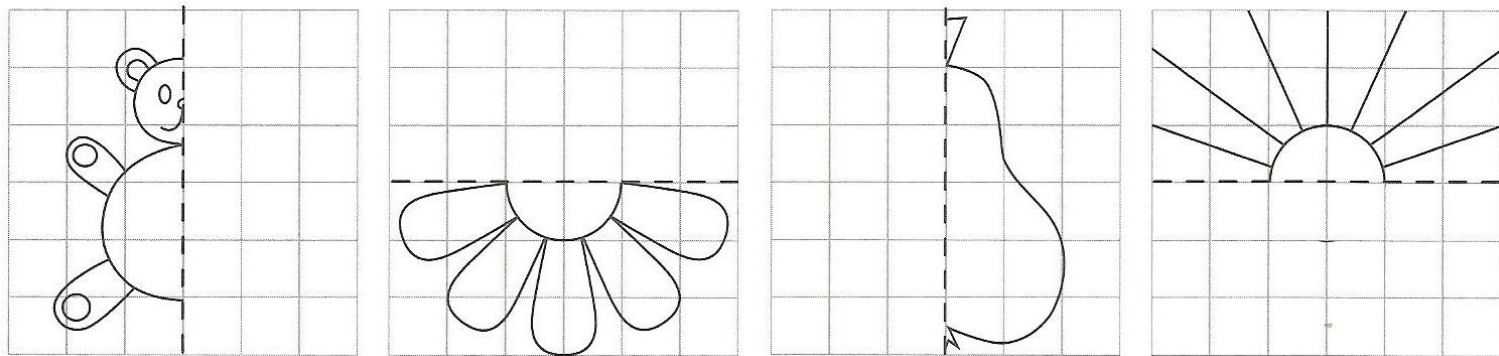


KAŽDÝ ZE ČTYŘ BRATRŮ DOSTAL OD BABIČKY DVACETIKORUNU. PAK NAKUPOVALI. KOLIK KORUN ZBYLO KAŽDÉMU? DOPLŇ TABULKU.



	KOUPIL	CENA	ZBYLO MU
ALEŠ		12 Kč	
BĚDA		7 Kč	
DAN		15 Kč	
FANDA		6 Kč	

DOKRESLI DRUHOU POLOVINU OBRÁZKU



ADÉLKA MÁ 11 BONBÓNŮ. PAVLÍK MÁ O 4 MÉNĚ. KOLIK BONBÓNŮ MÁ PAVLÍK?

PAVLÍK MÁ \_\_\_\_ BONBÓNŮ.

DÁŠA MÁ 6 LENTILEK. JANA MÁ O 5 LENTILEK VÍCE. KOLIK LENTILEK MÁ JANA?

JANA MÁ \_\_\_\_ LENTILEK.

TOM STAVÍ KOMÍN. POLOŽIL NA KOMÍN TŘINÁCTOU KOSTKU A KOMÍN SPADL. KOLIK KOSTEK MĚL KOMÍN PŘED PÁDEM?

KOMÍN MĚL \_\_\_\_\_ KOSTEK.